

## Elements, Compounds, and Mixtures

Classify each of the pictures below by placing the correct label in the blanks below:

A= Element

D= Mixture of compounds

B= Compound

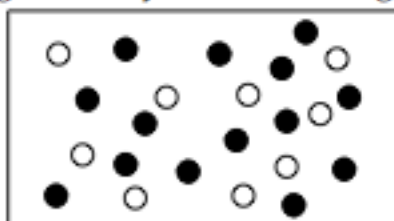
E= Mixture of elements and compounds

C= Mixture of elements

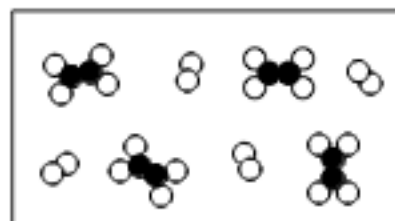
Each circle represents an atom and each different color represents a different kind of atom. If two atoms are touching then they are bonded together.



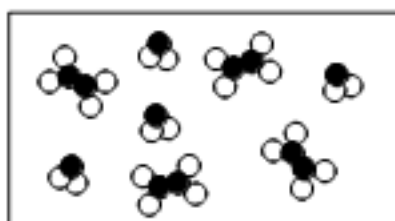
1) \_\_\_\_\_




2) \_\_\_\_\_



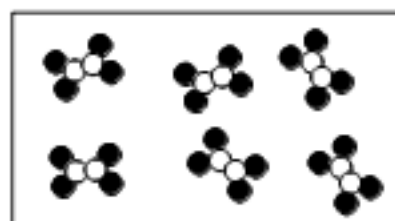
3) \_\_\_\_\_



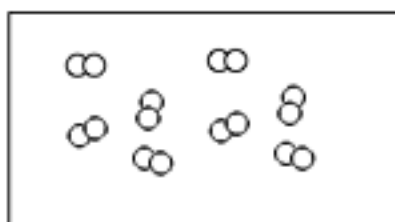
4) \_\_\_\_\_



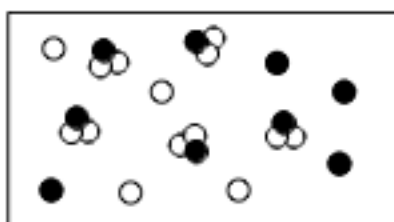
5) \_\_\_\_\_



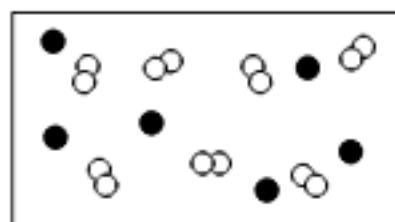
6) \_\_\_\_\_



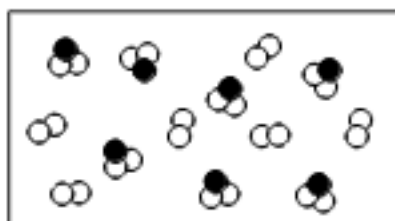
7) \_\_\_\_\_



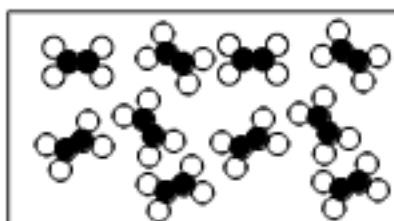
8) \_\_\_\_\_



9) \_\_\_\_\_



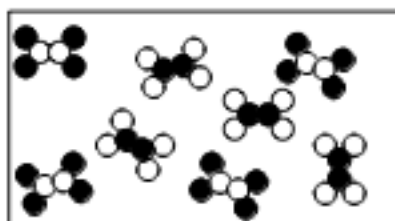
10) \_\_\_\_\_



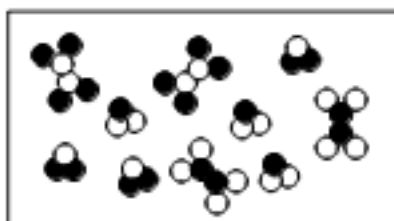
11) \_\_\_\_\_



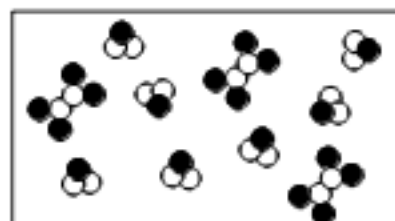
12) \_\_\_\_\_



13) \_\_\_\_\_



14) \_\_\_\_\_



15) \_\_\_\_\_